

Examples



Workout

Click here

Scan here



Question 1: Given £1 = 5 zloty convert each of the following into Polish zloty

- (a) £4 (b) £9 (c) £20 (d) £35 (e) £70 (f) £410 (g) £88

Question 2: Given £1 = 5 zloty convert each of the following into UK pounds

- (a) 15 zł (b) 35 zł (c) 250 zł (d) 180 zł (e) 715 zł (f) 900 zł (g) 95 zł

Question 3: Given £1 = 25 Mexican Peso convert each of the following into Pesos

- (a) £4 (b) £20 (c) £25 (d) £40 (e) £37 (f) £66 (g) £360

Question 4: Given £1 = 25 Mexican Peso convert each of the following into UK pounds

- (a) \$75 (b) \$250 (c) \$825 (d) \$4000 (e) \$9200 (f) \$38000 (g) \$1275

Question 5: Given £1 = \$1.50 convert each of the following into US dollars.

- (a) £3 (b) £5 (c) £7 (d) £20 (e) £40 (f) £50 (g) £100

Question 6: Given £1 = \$1.50 convert each of the following into UK pounds

- (a) \$3 (b) \$6 (c) \$15 (d) \$45 (e) \$300 (f) \$12 (g) \$33



Question 7: Given £1 = ₺4.25 convert each of the following into Turkish lira.

- (a) £9 (b) £15 (c) £9.60 (d) £73 (e) £853 (f) £9500 (g) 80p

Exchange Rates

Video 214a on www.corbettmaths.com

Question 8: Given £1 = ₺4.25 convert each of the following into UK pounds.

- (a) ₺29.75 (b) ₺76.50 (c) ₺110.50 (d) ₺2550 (e) ₺5100 (f) ₺0.85 (g) ₺4.59

Question 9: Given £1 = €1.28 convert each of the following into euros.

- (a) £6 (b) £4.50 (c) £13 (d) £58 (e) £190 (f) £5730 (g) £809

Question 10: Given £1 = €1.28 convert each of the following into pounds.

- (a) €64 (b) €153.60 (c) €1152 (d) €0.32 (e) €44.80 (f) €140.80 (g) €2.24

Apply

Question 1: Nicola went to Italy. She changed £800 into euros (€).
The exchange rate was £1 = €1.40
Change £800 into euros.

Question 2: A new TV in Tokyo costs ¥53380
The exchange rate is £1 = ¥157
How much is the TV in pounds?



Question 3: In Lisbon, a watch costs €80.
In Liverpool, the same watch costs £65.
The exchange rate is £1 = €1.25

Work out the difference in cost.

Question 4: Below are the prices of the same car in different countries.
£1 = €1.18 £1 = ¥140 £1 = \$1.25

USA	Ireland	England	Japan
\$20000	€17500	£15000	¥3000000

In which country is the car the best value?



Exchange Rates

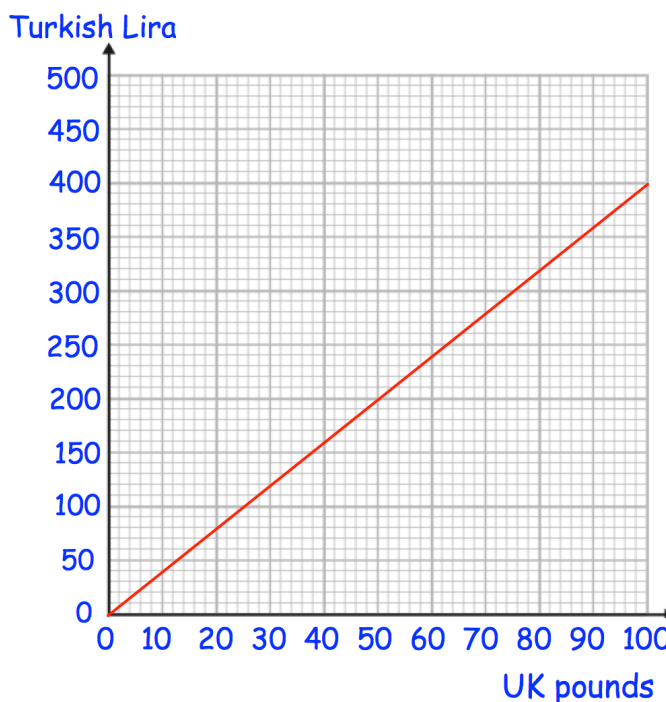
Video 214a on www.corbettmaths.com

Question 5: Martina wants to convert £300 into Euros.
The Post Office only has €20 notes.
The exchange rate is £1 = €1.17

- (a) How many €20 notes will Martina receive?
- (b) How much will it cost Martina?

Question 6: Shown is a conversion graph to convert between GB pounds and Turkish lira.

- (a) Convert £90 into Turkish lira.
- (b) Convert 100 lira into pounds.
- (c) Convert £250 into Turkish lira.
- (d) Convert 800 lira into pounds.

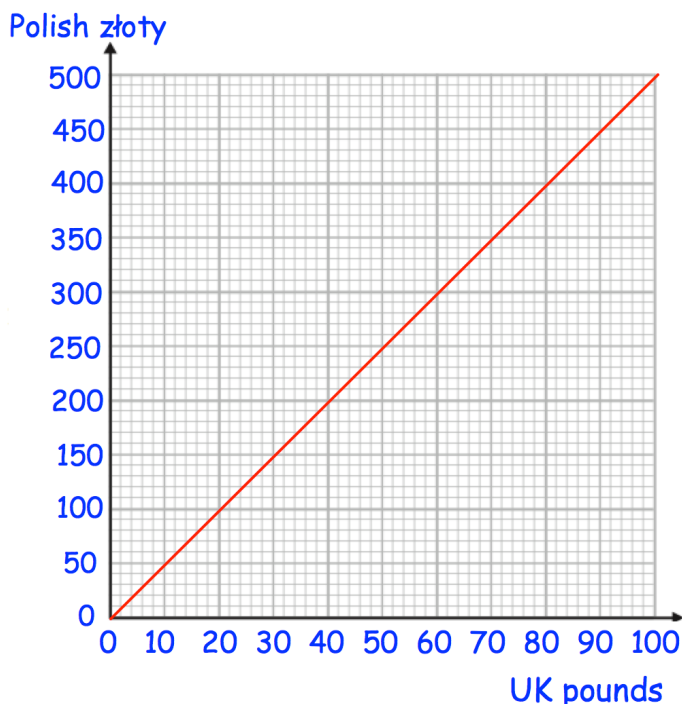


Question 7: Below is a conversion graph to convert between GB pounds and Polish zloty.

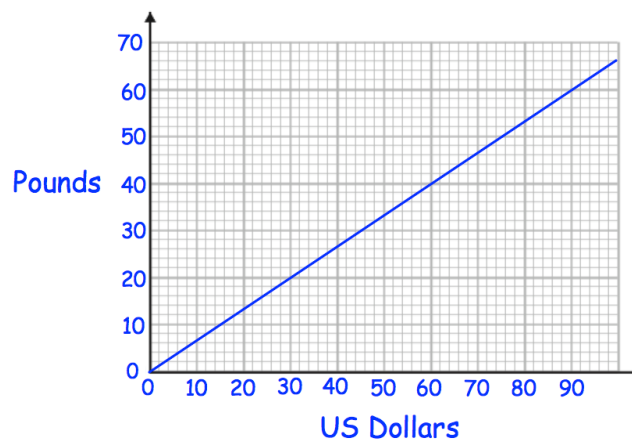
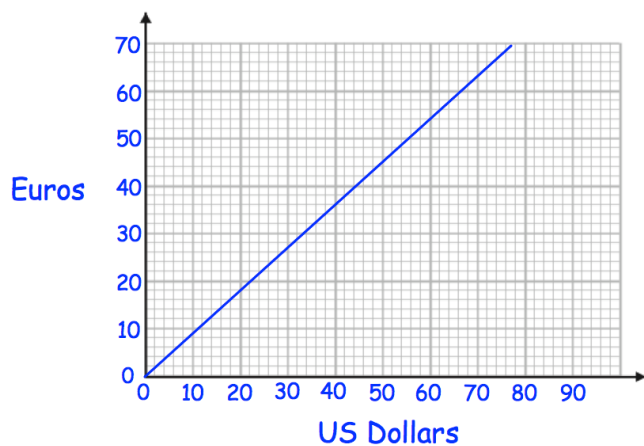
Jack has £400 and 1200 zloty
His hotel bill is 2000 zloty

He pays the bill with 1200 zloty and
some of the pounds.


Work out how many pounds he has left.



Question 8: Convert £160 into Euros



Answers



Click here



Scan here