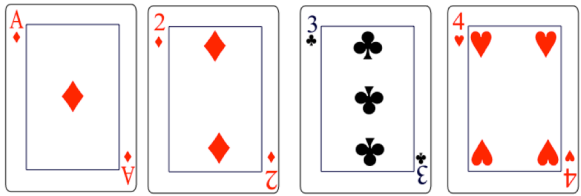
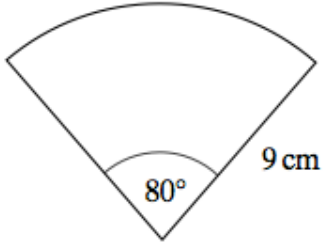
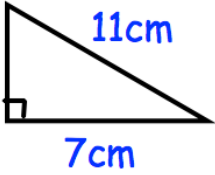


Name: \_\_\_\_\_

February 19	5-a-day	Higher
<p>Define a “discrete variable”</p>		
	<p>Sophie selects a card at random, then replaces it. She then selects another.</p> <p>What is the probability she selects two red cards?</p>	
 <p>Work out the area of the sector</p>		
<p>The triangle below is enlarged by scale factor 3.</p> 	<p>Find the area of the enlarged triangle.</p>	
<p>Hollie invests £4000 at 5% interest per annum.</p> <p>How many years will it take until she has double her initial amount?</p>		