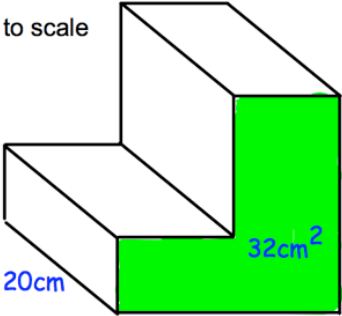
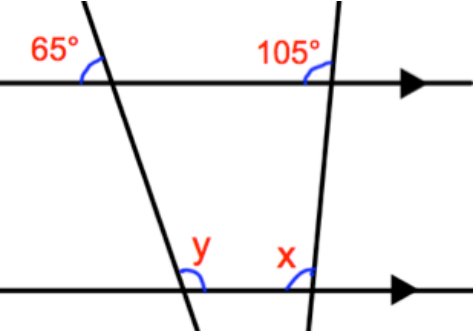



Name: _____

December 17	5-a-day	Foundation
<p>Not to scale</p> 	Find the volume of the prism.	
$\frac{5}{9} + \frac{1}{2}$	$\frac{4}{7} \times \frac{3}{8}$	
	Find x. Find y.	
	The radius of the can is 2cm. The height of the can is 7cm Find the volume of the can.	
Factorise $4y^2 - 8y$	Expand and simplify $(y + 4)(y + 5)$	