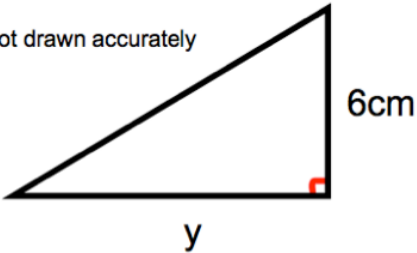
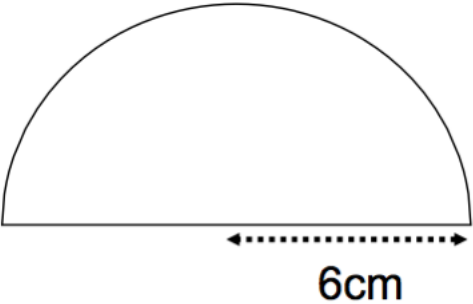
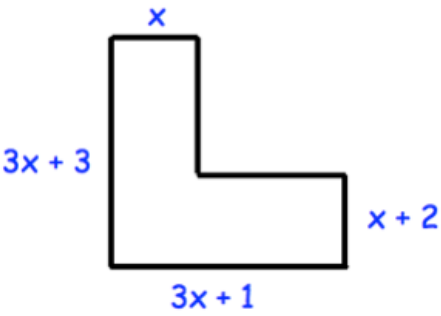


Name: _____

January 20	5-a-day	Foundation										
<p>Simplify $3a + 2w - 5a - 9w$</p>												
<p>The area of the triangle is 21cm^2</p> <p>Not drawn accurately</p> 	<p>Find y</p>											
<table border="1" data-bbox="185 974 566 1191"><thead><tr><th>Breed</th><th>Frequency</th></tr></thead><tbody><tr><td>Spaniel</td><td>11</td></tr><tr><td>Poodle</td><td>7</td></tr><tr><td>Greyhound</td><td>4</td></tr><tr><td>Jack Russell</td><td>14</td></tr></tbody></table>	Breed	Frequency	Spaniel	11	Poodle	7	Greyhound	4	Jack Russell	14	<p>James is drawing a pie chart.</p> <p>Work out the size of each angle.</p>	
Breed	Frequency											
Spaniel	11											
Poodle	7											
Greyhound	4											
Jack Russell	14											
	<p>Find the perimeter</p>											
	<p>Find an expression for the perimeter.</p>											