

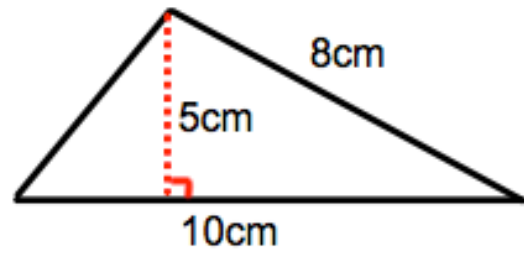
Name: _____

July 13

5-a-day

Foundation


Calculate the area



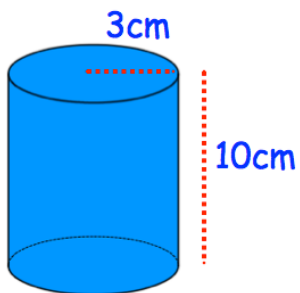
Age	Frequency
5	3
6	5
7	2

Calculate the mean

$$2x + 7$$



Write an expression for the perimeter.



Calculate the volume

Before sale: £50
During sale: £30

What is the percentage decrease in price?