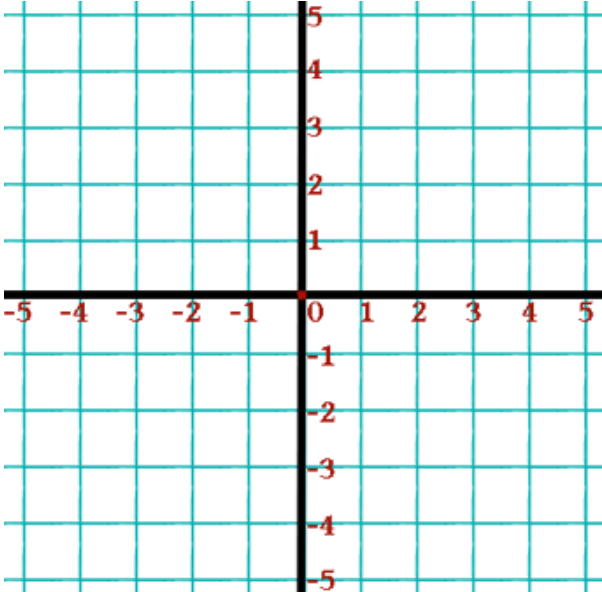

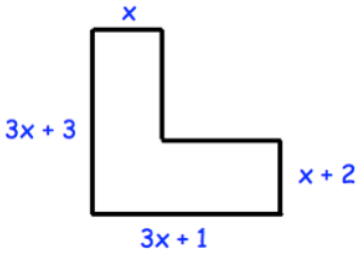


Name: _____

July 19	5-a-day	Foundation												
<p>Anne and Ben are giraffes</p> <p>The ratio of Anne's height: Ben's height is 2:5</p> <p>If Anne is 6 foot tall, how tall is Ben?</p>														
	<p>Draw $x = 1$</p> <p>Draw $y = -2$</p>													
<p>Calculate the area of the trapezium</p>	<p>Complete the table and draw the line $x + y = 3$</p> <table border="1" data-bbox="799 1055 1257 1249"> <tr> <td>x</td> <td>-2</td> <td>-1</td> <td>0</td> <td>1</td> <td>2</td> </tr> <tr> <td>y</td> <td></td> <td></td> <td></td> <td></td> <td></td> </tr> </table>	x	-2	-1	0	1	2	y						
x	-2	-1	0	1	2									
y														
 <p>The perimeter is 68cm</p>	<p>Find x</p>													