
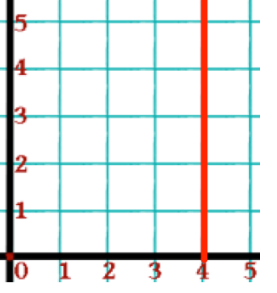
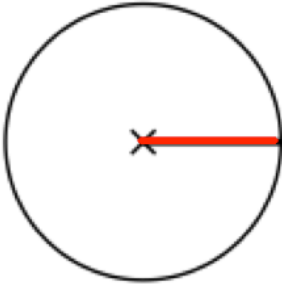


Name: \_\_\_\_\_

July 20	5-a-day	Foundation
<p>What is the equation of this line?</p> 	<p>What is the equation of this line?</p> 	
<p>Find the nth term</p> <p><b>7, 11, 15, 19 ...</b></p>	<p>Work out the 100th term</p>	
	<p>What part of the circle is shown? (in red)</p>	
$4\frac{1}{3} - 3\frac{4}{9}$		
<p>Explain why regular hexagons tessellate.</p>		