

Name: _____

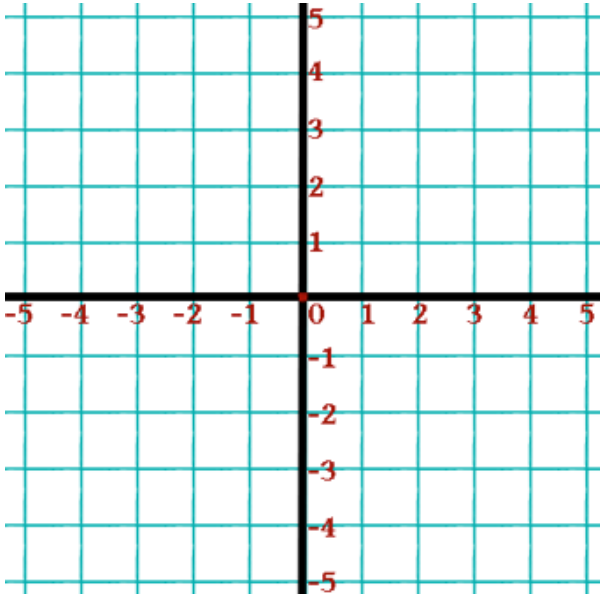
July 24

5-a-day

Foundation

$$v = u + 10t$$

Find V if $u = -4$ and $t = 2$

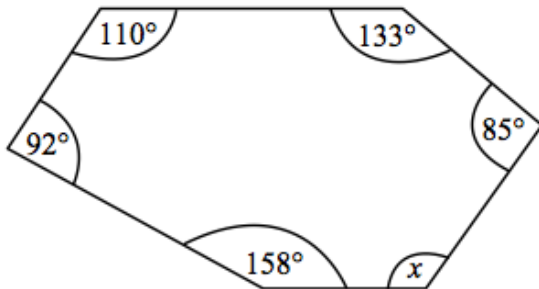


Draw $x = -2$

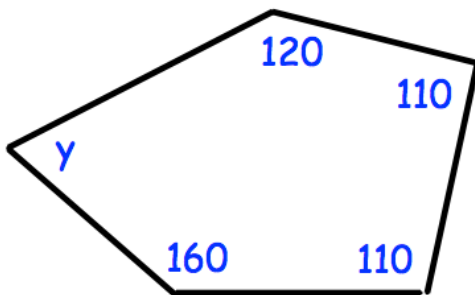
Draw $y = 1$

Complete the table and draw the line $y = 2x + 1$

x	-2	-1	0	1	2
y					



Find x



Find y