
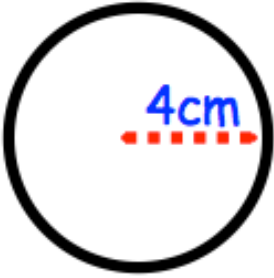
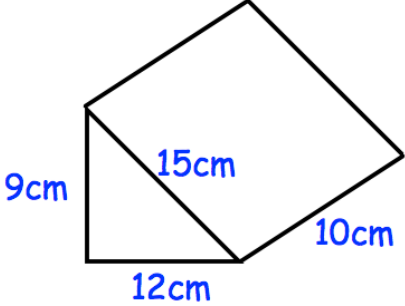

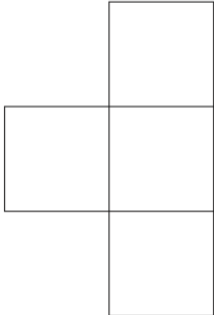
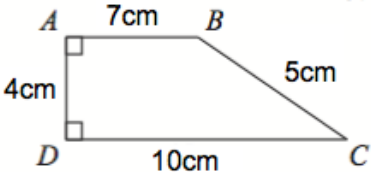


Name: _____

June 10	5-a-day	Foundation
<p data-bbox="300 255 520 327">$3x + 2$</p> 	<p data-bbox="794 237 1369 309">Write an expression for the perimeter of the rectangle</p>	
	<p data-bbox="794 602 1273 674">Work out the circumference. Leave your answer in terms of pi.</p>	
	<p data-bbox="794 967 1177 999">Calculate the surface area</p>	
<p data-bbox="165 1335 708 1366">The perimeter of a square is 28cm.</p>  <p data-bbox="165 1554 724 1626">Work out the perimeter of the shape on the right</p>		
<p data-bbox="165 1697 475 1729">Calculate the area</p>		<p data-bbox="1129 1715 1401 1747">Not drawn accurately</p>