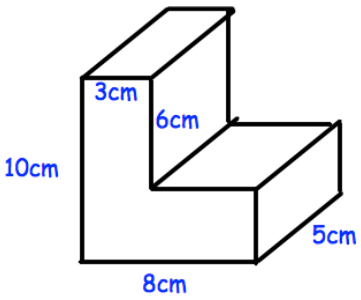
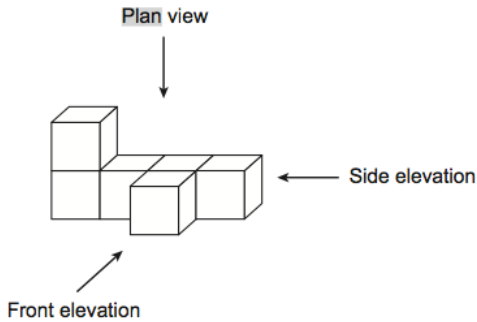
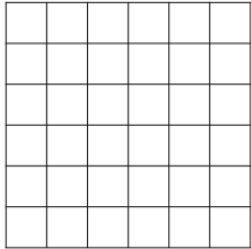


Name: \_\_\_\_\_

May 16th	5-a-day	Foundation
<p>The probability of it raining is 0.3</p> <p>What is the probability of it not raining?</p>		<p>Over 20 days, how many would you expect rain?</p>
<p>Jose has some counters.</p> <p>20% are red. <math>\frac{1}{2}</math> are green. The rest are blue.</p> <p>There are 18 blue counters. How many counters are there?</p>		
<p>Simplify</p> <p><math>y^3 \times y^4</math></p>		
		<p>Calculate the volume of this prism.</p>
		<p>Draw the front elevation</p>