

Name: _____

May 18th

5-a-day

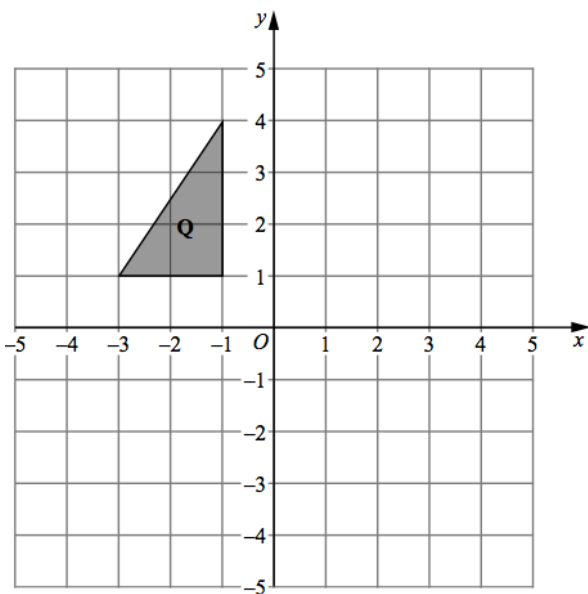
Foundation

19 22 25 28

Work out the n th term.


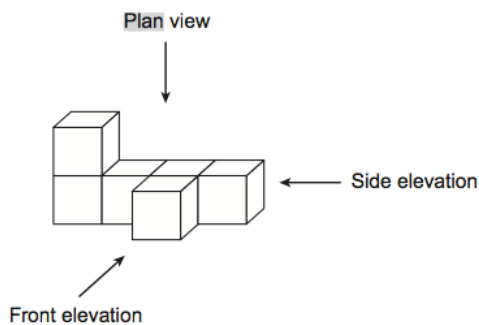
Calculate the 100th term.

Solve $3w + 8 = 23$



Reflect Q in the x-axis

Rotate Q 90 degrees clockwise about the origin



Draw the side elevation