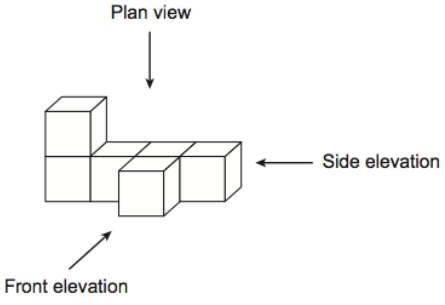
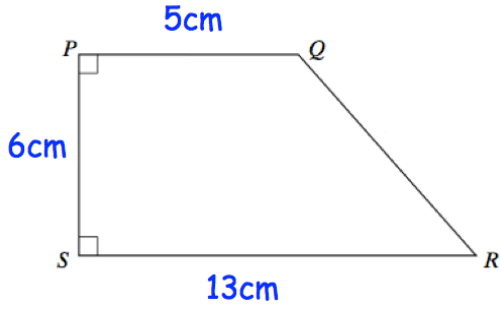
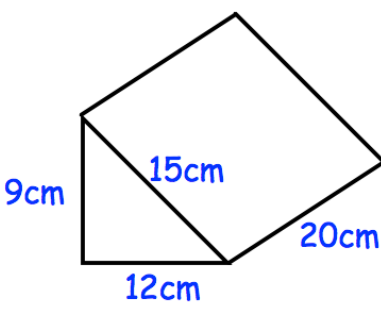


Name: _____

May 21st	5-a-day	Foundation
<p>The nth term of a sequence is $n^2 + 3$</p> <p>Work out the first 5 terms</p>		
<p>Plan view</p>  <p>Side elevation</p> <p>Front elevation</p>	<p>Draw the side elevation</p>	
 <p>5cm</p> <p>6cm</p> <p>13cm</p> <p>P</p> <p>Q</p> <p>S</p> <p>R</p>	<p>Calculate the area</p>	
 <p>9cm</p> <p>15cm</p> <p>12cm</p> <p>20cm</p>	<p>Calculate the surface area</p>	
<p>k is even.</p> <p>$\frac{1}{2}k + 1$</p>	<p>Tick the correct box</p> <p><input type="checkbox"/> odd</p> <p><input type="checkbox"/> even</p> <p><input type="checkbox"/> either</p>	