

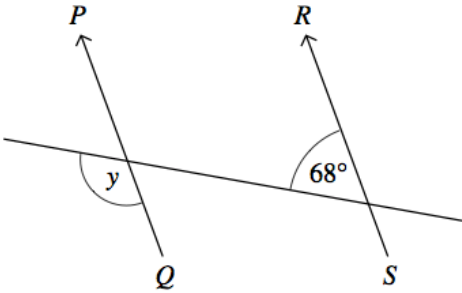


Name: _____

May 24th	5-a-day	Foundation
 <p>Draw a radius</p>	 <p>Draw a tangent</p>	
<p>Michael cycles at an average speed of 20mph.</p> <p>How far does he cycle in 30 minutes?</p>	<p>How far does he cycle in 2 hours 15 minutes?</p>	
<p>A circular lawn has radius 3.5m</p> <p>Calculate the circumference of the lawn.</p>		
	<p>Work out the size of y</p>	
<p>Write 60 as a product of primes.</p> <p>Give your answer in index form</p>		