
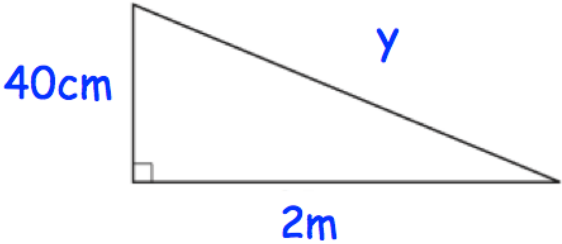
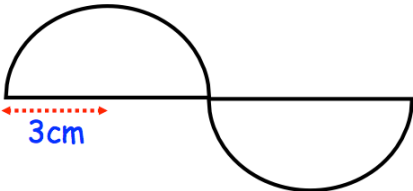


Name: \_\_\_\_\_

November 19	5-a-day	Foundation
<p>Construct the perpendicular bisector</p> 	<p>Work out</p> $\frac{2}{5} + \frac{2}{3}$	
<p>The weight of a dry sponge is 50g. The weight of a damp sponge is 128g.</p> <p>Calculate the percentage increase in weight.</p>	<p>Work out</p> $\frac{2}{5} \times \frac{2}{3}$	
	<p>Find y</p>	
 <p>Shown is a logo made from congruent two semi-circles with radius 3cm.</p>	<p>Find the perimeter.</p>	