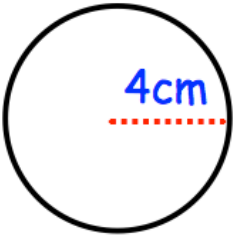

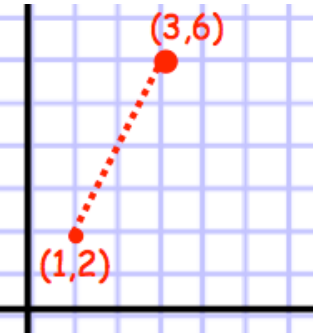


Name: \_\_\_\_\_

November 22	5-a-day	Foundation
<p>Find the circumference</p> 		
<p>Calculate the nth term for</p> <p><b>8, 13, 18, 23</b></p>		<p>Using the nth term, work out the 50th term</p>
<p>Between which two consecutive integers does <math>\sqrt{40}</math> lie?</p>		
 <p>Draw a line to represent <math>x &lt; 1</math></p>		
		<p>What is the gradient of the line joining (1,2) and (3,6)?</p>