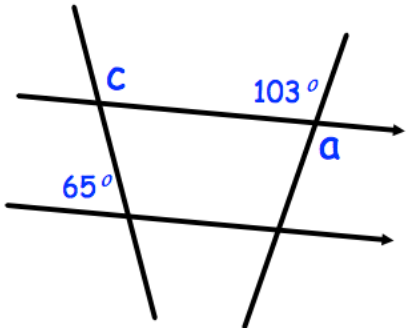

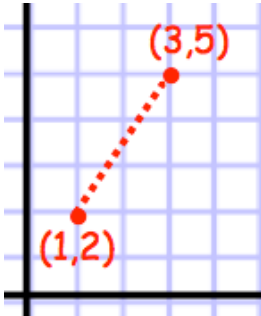



Name: _____

October 29	5-a-day	Foundation
<p>Given $180 = 2^2 \times 3^2 \times 5$</p> <p>What is 360 as a product of primes?</p>		<p>What is 1800 as a product of primes?</p>
		<p>Size of a?</p> <p>Size of c?</p>
 <p>Draw a line to represent $x < 2$</p>		
		<p>What is the gradient of the line joining the points (1, 2) and (3, 5)?</p>
<p>$2y + 3$</p> 		<p>The perimeter of the rectangle is 78cm. Find the size of y.</p>