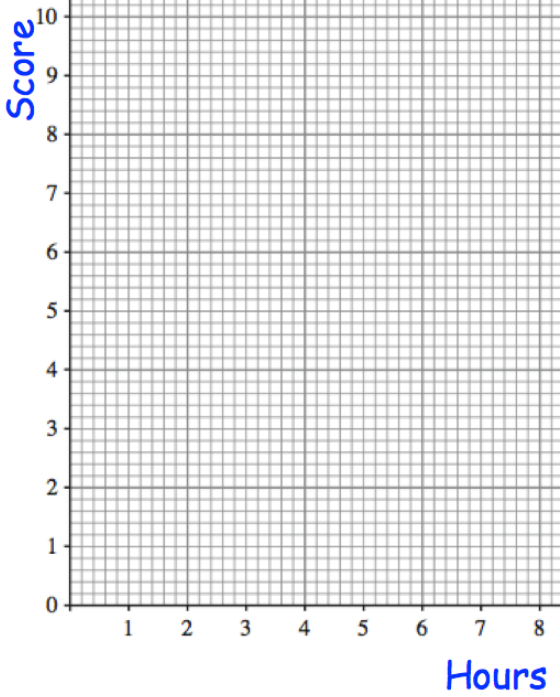
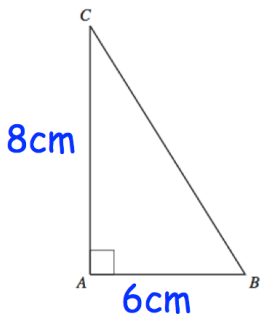
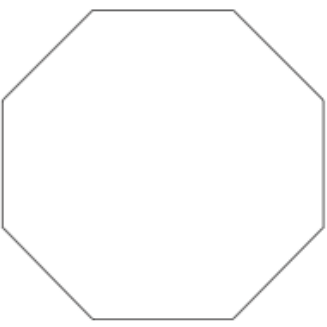


Name: \_\_\_\_\_

September 24	5-a-day	Foundation
	<p>Plot the data below</p> <p>Anna: 3 hours revising, scored 5/10 Betty: 7 hours revising, scored 8/10 Carl: 2 hours revising, scored 2/10 Dave: 6 hours revising, scored 7/10 Emma: 3 hours revising, scored 6/10 Fred: 5 hours revising, scored 7/10</p>	<p>Describe the relationship shown.</p>
	<p>Find the area of triangle ABC.</p>	
<p>Calculate the length of BC.</p>	<p>Find the perimeter of ABC.</p>	
	<p>Shown is a regular octagon. Work out the size of each interior angle.</p>	