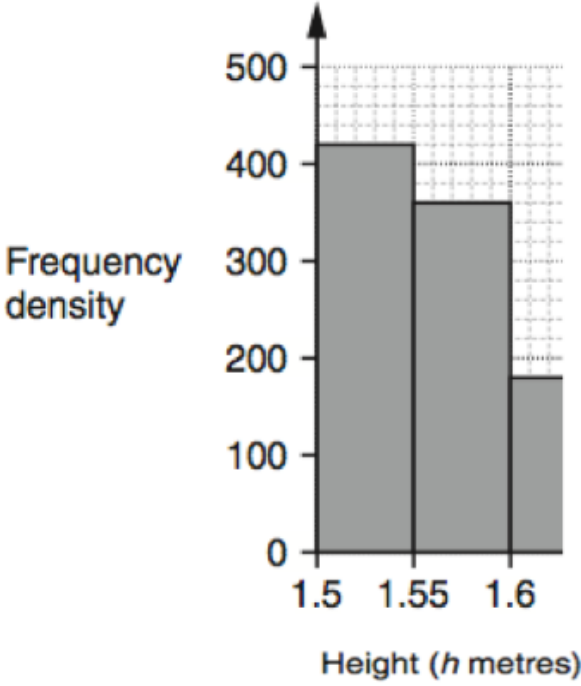
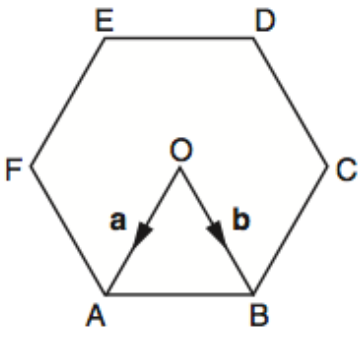
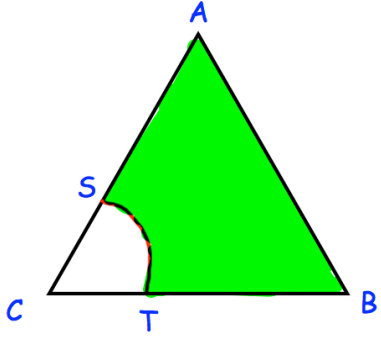


Name: _____

December 31	5-a-day	Higher
	<p>How many people had a height $1.5 \leq h < 1.55$?</p>	
		<p>How many people had a height $1.55 \leq h < 1.6$?</p>
	<p>Find in terms of a and b</p> <p>AB</p> <p>EA</p>	
 <p>Shown is an equilateral triangle ABC with side length 5cm.</p> <p>CS and CT are both 2cm.</p> <p>CST is a sector of a circle, centre C.</p> <p>Calculate the percentage of the triangle shaded.</p>		