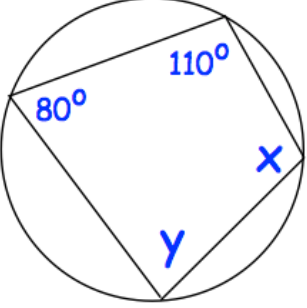
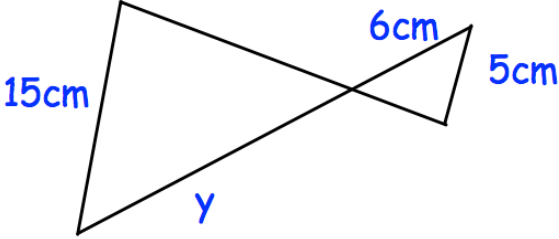
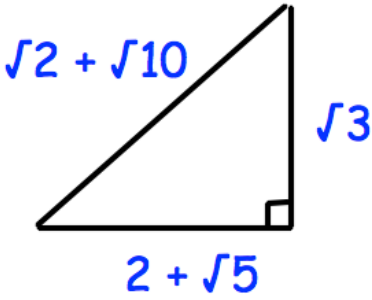


Name: _____

October 13	5-a-day	Higher
<p>Write down the value of:</p> <p>$27^{\frac{2}{3}}$</p>	<p>Write down the value of:</p> <p>8^{-2}</p>	
	<p>x =</p> <p>y =</p>	
	<p>Find y</p>	
<p>Find the equation of the straight line through (0, 8) which is perpendicular to the line $y = 4x + 1$</p>		
	<p>Prove this triangle is right-angled.</p>	