
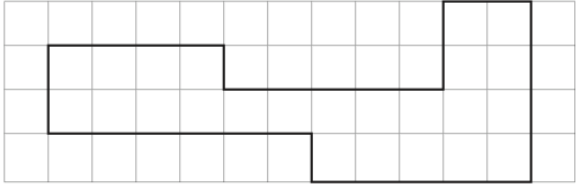
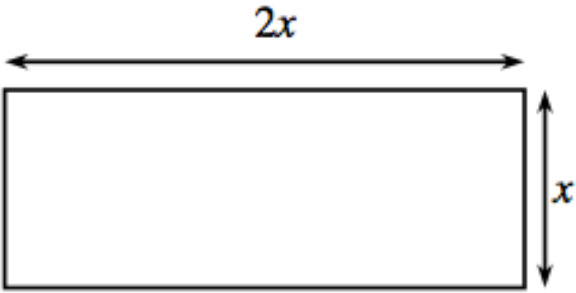
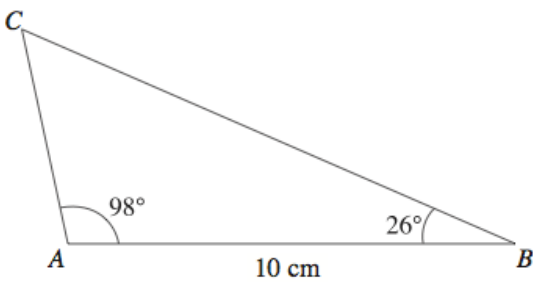


Name: \_\_\_\_\_

April 13th	5-a-day	Numeracy
<p data-bbox="172 248 767 338"></p> <p data-bbox="164 353 759 443">Arrange the discs so they make the smallest four-digit number.</p>		<p data-bbox="799 241 1302 331">Arrange the discs to make the largest four-digit odd number</p>
		<p data-bbox="799 607 1350 696">This shape has been drawn on a centimetre square grid</p> <p data-bbox="799 741 1023 786">Find the area</p>
		<p data-bbox="799 972 1294 1061">Work out the perimeter of this rectangle</p>
<p data-bbox="193 1346 735 1458">0.68, <math>\frac{33}{50}</math>, 67%.</p> <p data-bbox="164 1547 671 1637">Write in order from smallest to largest</p>		
		<p data-bbox="799 1704 1254 1749">Work out the missing angle</p>