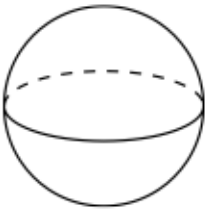
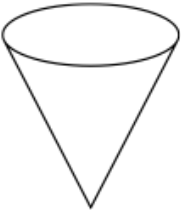
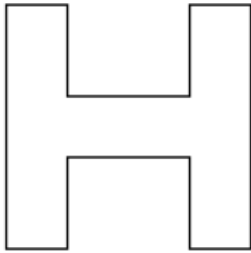


Name: \_\_\_\_\_

April 21st	5-a-day	Numeracy
 <p>Name this solid _____</p>	 <p>Name this solid _____</p>	
<p>Draw all the lines of symmetry on the letter H.</p>		
<p>Maddie's salary is £16,000 and she is due to get an increase of 5%.</p> <p>How much will this increase be?</p>		
<p>To feed 30 people Mary makes</p> <p>20 beef sandwiches 32 cheese sandwiches 50 ham sandwiches</p>		<p>How many of each would she need to make for 45 people?</p>
<p>Write 8.45 correct to 1 decimal place.</p>		<p>Round 2983 to the nearest 10.</p>