
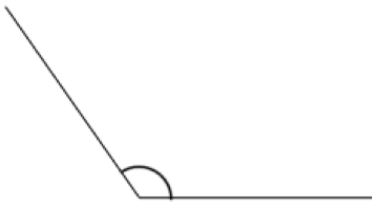
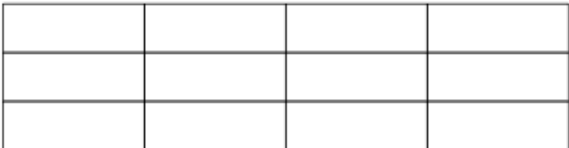


Name: _____

August 10th	5-a-day	Numeracy
 <p>This angle is about degrees</p>	 <p>This angle is about degrees</p>	
<p>In the shape, draw a 30 degree angle.</p>		
 <p>Shade $\frac{1}{3}$ of the shape</p>	<p>What is $\frac{1}{3}$ as a decimal?</p>	
<p>A chair costs £17</p> <p>How much will 6 chairs cost?</p>		
<p>Write a number that is both a square number and a cube number.</p>		