
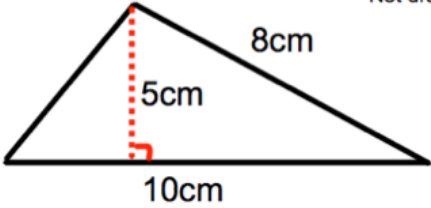



Name: _____

December 25th	5-a-day	Numeracy														
 <p>An apple costs 26p each.</p>		How much will 4 apples cost?														
<p>Write these numbers in order of size, starting with the smallest number.</p> <p>0.407 0.74 0.4 0.047 0.7</p>																
<table border="1" data-bbox="185 976 555 1283"><tbody><tr><td>Southville</td><td>09 18</td></tr><tr><td>Leek</td><td>09 28</td></tr><tr><td>Milton</td><td>09 41</td></tr><tr><td>Newtown</td><td>09 49</td></tr><tr><td>Red Island</td><td>09 55</td></tr><tr><td>Sandville</td><td>10 13</td></tr><tr><td>Bakerstown</td><td>10 31</td></tr></tbody></table>	Southville	09 18	Leek	09 28	Milton	09 41	Newtown	09 49	Red Island	09 55	Sandville	10 13	Bakerstown	10 31		How long does the train from Leek to Red Island take?
Southville	09 18															
Leek	09 28															
Milton	09 41															
Newtown	09 49															
Red Island	09 55															
Sandville	10 13															
Bakerstown	10 31															
<p>Not drawn accurately</p> 		Find the area of this triangle.														
		Work a number on each card so that: The range is 7 The median is 8 and the mean is 7.														