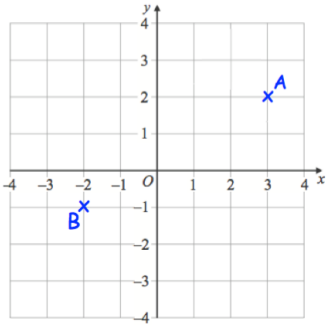
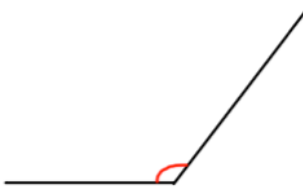

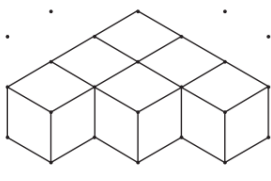


Name: \_\_\_\_\_

December 27th	5-a-day	Numeracy
	<p>Write down the coordinates of A.</p> <p>Write down the coordinates of B.</p>	
 <p>Answer ..... angle</p>	 <p>Answer ..... angle</p>	
<p>0.05                      50%</p> <p>0.25                      20%</p> <p>0.2                         25%</p> <p>0.5                         5%</p>	<p>Match up the decimals and percentages.</p>	
 <p>Shown is a solid made from 1cm cubes.</p>	<p>What is the volume of the solid?</p>	
<p>Work out the size of x.</p> 