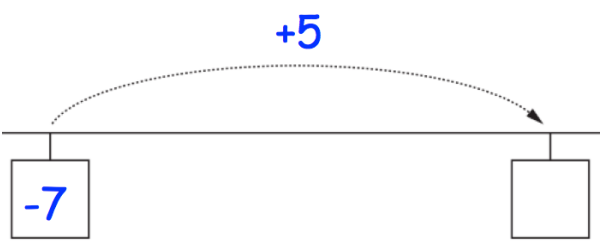
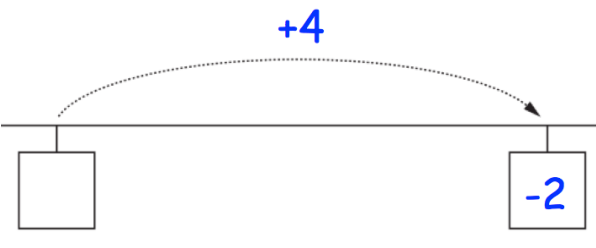




Name: _____

December 4th	5-a-day	Numeracy
 <p>A horizontal number line with a solid line and a dashed arrow above it pointing right. The arrow is labeled '+5'. Below the line, there are two boxes. The left box contains '-7' and the right box is empty.</p>	 <p>A horizontal number line with a solid line and a dashed arrow above it pointing right. The arrow is labeled '+4'. Below the line, there are two boxes. The left box is empty and the right box contains '-2'.</p>	
 <p>A simple circle with a small dot in the center representing the center point.</p>	<p>Draw a diameter on the circle</p>	
 <p>A simple circle with a small dot in the center representing the center point.</p>	<p>Draw a tangent to the circle</p>	
<p>Write down the next two terms in this sequence</p> <p>1 5 9 13</p>	<p>Is 200 a term in this sequence? Explain your answer.</p>	
<p>Work out two-fifths of 45</p>	<p>Work out 30% of 700</p>	