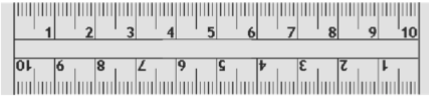
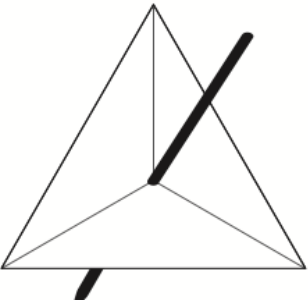



Name: _____

November 25th	5-a-day	Numeracy
Work out 7×23	Work out $1284 - 311$	
 <p>Convert 8 centimetres into millimetres</p>	Convert 120 millimetres into centimetres	
<p>Menu</p> <p>Burger 90p Egg 70p Chips 80p Mash 65p Drink 55p</p>	Diane buys a portion of chips. She pays with 2p pieces. How many does she need?	
	This spinner has three sections. It is certain to land on an even number. Label the spinner.	
 <p>What percentage of this shape is not shaded?</p>		