
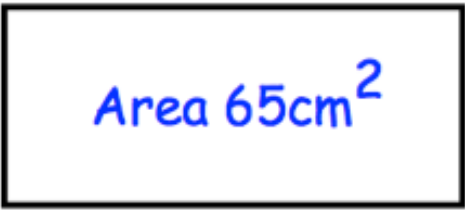
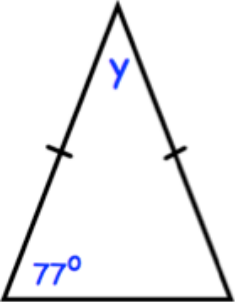


Name: _____

October 26th	5-a-day	Numeracy
	The three numbers on the cards have a sum of 60. Write the numbers on the cards.	
	Find y	
Find y		
<u>Serves 4</u> Chopped tomatoes 400g Garlic 1 clove Minced beef 350g	<u>Serves 8</u> Chopped tomatoes _____ Garlic _____ Minced beef _____	
Michael wins £200 in a competition. He gives 30% of the money to his aunt. He gives $\frac{1}{5}$ of the money to his brother.	How much money does Michael have left?	