

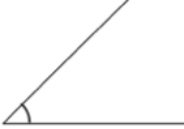


Name: \_\_\_\_\_

October 6th	5-a-day	Numeracy
	A red apple cost 27p A green apple cost 24p	What is the total cost for one red and one green apple?
Jenny buys 3 lettuces that cost 70p each.  She pays with a £5 note.  How much change should she receive?		
Work out $\frac{5}{6}$ of 78		
  This angle is about ..... degrees	  This angle is about ..... degrees	
-7°C   -4°C   2°C   12°C   -3°C  What is the difference between the coldest and warmest temperature?		