
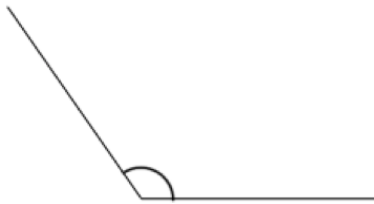



Name: _____

October 7th	5-a-day	Numeracy
 <p>This is an angle</p>	 <p>This is an angle</p>	
<p>Shade 40% of this shape</p> 		
<p>Simplify</p> $\frac{18}{24}$		
<p>In one week 4000 people visited a library.</p> <p>Of these 4000 people, 20% visited on Friday.</p> <p>How many went on Friday?</p>		
<p>$\frac{2}{5}$ of the people visited on Saturday.</p> <p>How many people visited on Saturday?</p>		