
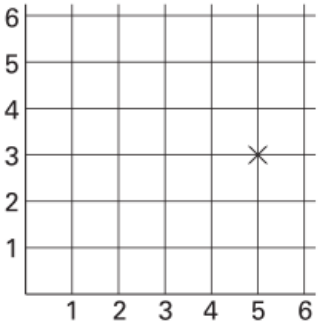
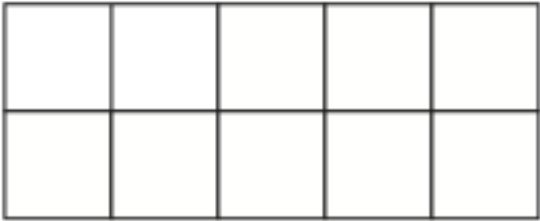


Name: _____

September 13th	5-a-day	Numeracy
<p>Show 10 on the scale with an arrow.</p> 		
<p>$\frac{1}{2}$ of 14 = $\frac{1}{4}$ of</p>		
	<p>Write down the coordinate shown.</p> <p>Plot the coordinate (3, 0)</p>	
	<p>Shade 30% of this rectangle.</p>	
<p>Hannah is y years old. Martin is four years older.</p> <p>Write an expression for Martin's age.</p>	<p>Hannah is y years old. Beth is twice as old as Hannah.</p> <p>Write an expression for Beth's age.</p>	