

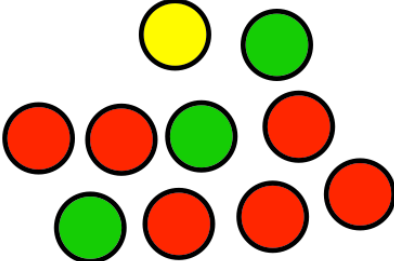
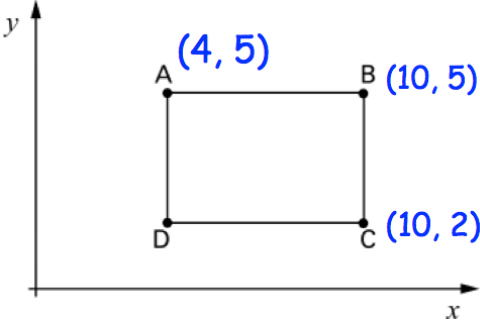


Name: \_\_\_\_\_

September 16th	5-a-day	Numeracy
$48 + 16$	$715 - 186$	
 <p>Write two numbers on the cards that: Add to give 12. Multiply to give 32.</p>	 <p>Write two numbers on the cards that: Add to give 0. Multiply to give <math>-16</math>.</p>	
	A counter is picked at random.  What is the probability of a green?  What is the probability of a blue?	
	What are the coordinates of D?	
E is halfway between the coordinates A and B.  Write down the coordinates of E.		