

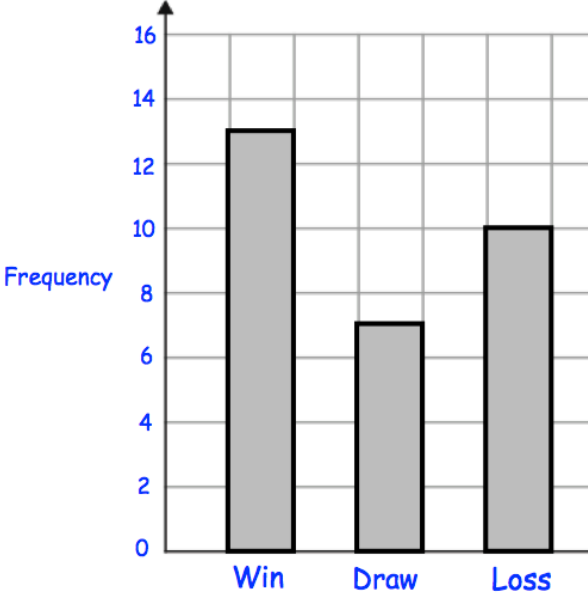


Name: _____

September 28th	5-a-day	Numeracy								
<p>Kevin arrives at school at twenty to nine.</p> <p>Complete the 24-hour digital clock to show this time.</p>										
<p>A 24-hour digital clock shows</p> 	<p>What would the time be if it were shown on a 12-hour clock?</p>									
 <table border="1"><caption>Match Results Frequency</caption><thead><tr><th>Result</th><th>Frequency</th></tr></thead><tbody><tr><td>Win</td><td>13</td></tr><tr><td>Draw</td><td>7</td></tr><tr><td>Loss</td><td>10</td></tr></tbody></table>	Result	Frequency	Win	13	Draw	7	Loss	10	<p>How many matches did the team win?</p>	
Result	Frequency									
Win	13									
Draw	7									
Loss	10									
	<p>How many matches did the team play in total?</p>									
<p>Work out 20% of 90</p>	<p>Work out 75% of 40</p>									