
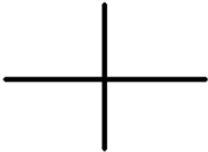
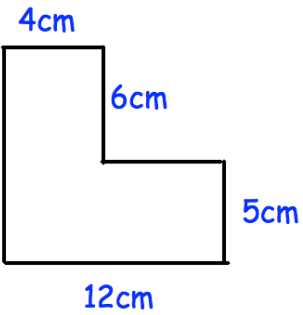


Name: _____

September 30th	5-a-day	Numeracy																				
<table border="1"><tr><td>8</td><td>7</td><td>3</td><td><input type="checkbox"/></td></tr><tr><td>5</td><td>9</td><td>7</td><td><input type="checkbox"/></td></tr><tr><td>8</td><td>4</td><td>4</td><td><input type="checkbox"/></td></tr><tr><td colspan="3"><hr/></td><td></td></tr><tr><td><input type="checkbox"/></td><td><input type="checkbox"/></td><td><input type="checkbox"/></td><td><input type="checkbox"/></td></tr></table>	8	7	3	<input type="checkbox"/>	5	9	7	<input type="checkbox"/>	8	4	4	<input type="checkbox"/>	<hr/>				<input type="checkbox"/>	<input type="checkbox"/>	<input type="checkbox"/>	<input type="checkbox"/>		Find the row and column totals
8	7	3	<input type="checkbox"/>																			
5	9	7	<input type="checkbox"/>																			
8	4	4	<input type="checkbox"/>																			
<hr/>																						
<input type="checkbox"/>	<input type="checkbox"/>	<input type="checkbox"/>	<input type="checkbox"/>																			
<p style="text-align: center;"></p> <p>Complete this sentence: The two lines are</p>	<p style="text-align: center;"></p> <p>Complete this sentence: The two lines are</p>																					
<p>Arrange in order, from smallest to largest</p> <p>0.2 0.11 0.034 0.109 0.21</p>																						
<p style="text-align: center;"></p>		What is the perimeter of the shape?																				
What is 7.5314 to two decimal places?																						