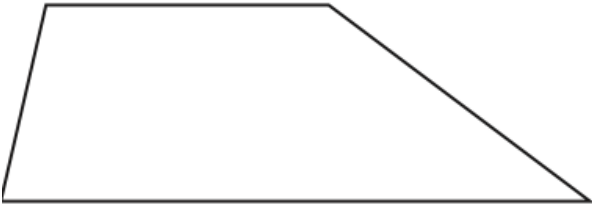
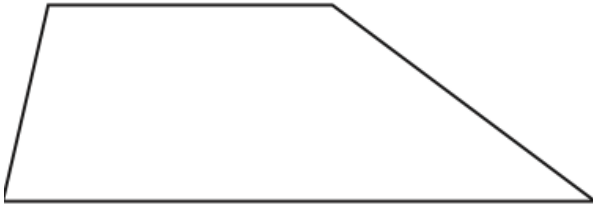
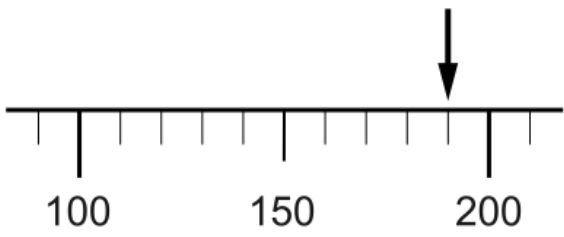
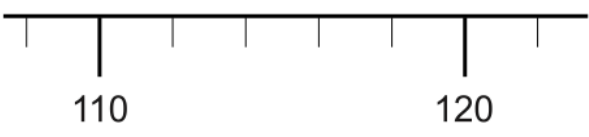


Name: \_\_\_\_\_

February 10th	5-a-day	Numeracy
<p style="text-align: center;"><b>Menu</b></p> <p><b>Burger</b>     90p <b>Egg</b>        70p <b>Chips</b>      80p <b>Mash</b>      65p <b>Drink</b>      55p</p>	<p>Harriet buys egg, chips and a drink.</p> <p>How much does she pay?</p>	
<p>She pays with a £20 note.</p> <p>How much change should she get?</p>	<p>Natalie wants to buy burger, mash and 2 drinks.</p> <p>She has £1.20. How much more does she need?</p>	
 <p>Draw one line to split this quadrilateral into two triangles</p>	 <p>Draw one line to split this quadrilateral into one triangle and one quadrilateral</p>	
<p>Multiply 359 by 4, then add 812</p>		
 <p>What is the number?</p>	 <p>Draw an arrow to show 113</p>	