


Name: \_\_\_\_\_

**February 24th**


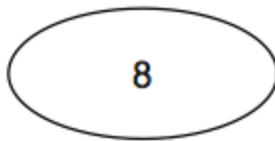
**5-a-day**

**Numeracy**

What fraction of the shape is shaded?




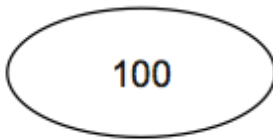
Input



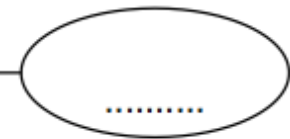
Output




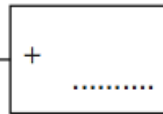
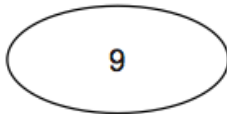
Input



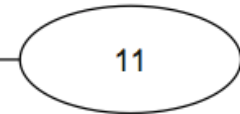
Output



Input



Output



..... 30 60 120 ..... .....

Fill in the missing numbers

140 70 35 .....

Find the missing number