


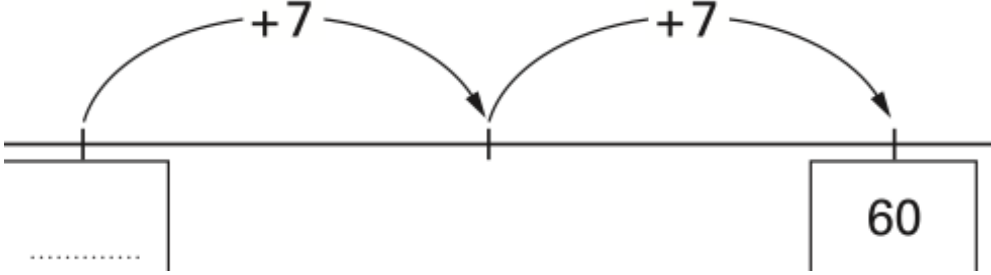
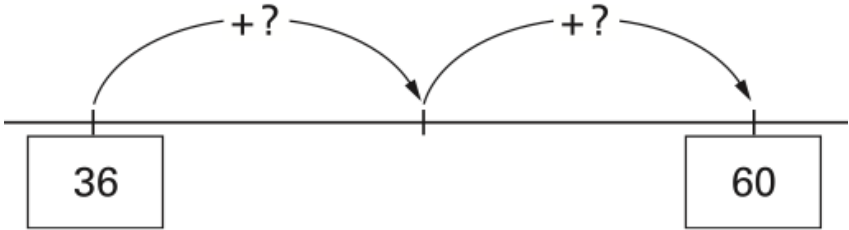


Name: _____

February 26th	5-a-day	Numeracy
Add together 155 and 418	Subtract 183 from 824	
Multiply 58 by 3	Divide 720 by 5	
<p>Key:  represents 2 people</p> <p>Male </p> <p>Female </p>	How many more Males than Females were there?	
 <p>A horizontal number line with three tick marks. The rightmost tick mark is labeled '60'. Two curved arrows point from left to right between the tick marks. The first arrow is labeled '+7' and the second is also labeled '+7'. Below the leftmost tick mark is a box containing a dotted line '.....'. Below the rightmost tick mark is a box containing the number '60'.</p>		
 <p>A horizontal number line with three tick marks. The leftmost tick mark is labeled '36' and the rightmost tick mark is labeled '60'. Two curved arrows point from left to right between the tick marks. The first arrow is labeled '+?' and the second is also labeled '+?'.</p> <p>On the number line above, both steps are the same size. What size is each step?</p>		