

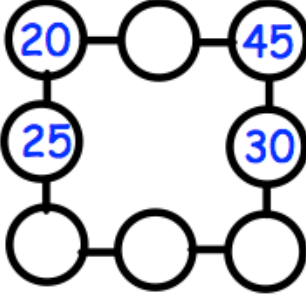



Name: _____

January 1st	5-a-day	Numeracy
<p>Below is 8 twenty pence pieces. What is the total value of the coins?</p> 		
	<p>The time shown on the clock is 9:24am.</p> <p>Write 9:24am as 24 hour time:</p> <p>_____</p> <p>Write 1:15pm as 24 hour time:</p> <p>_____</p>	
<p>In the diagram, three circles in a straight line must add to 100.</p> <p>Write in the missing numbers.</p>		
<p>Menu</p> <p>Tea £1.50</p> <p>Coffee £2.00</p> <p>Flapjack £2.50</p> <p>Jack pays for two coffees and two flapjacks.</p> <p>Altogether how much do they cost?</p>		
<p>Max pays for one tea, one coffee and one flapjack.</p> <p>He pays with a £10 note.</p> <p>How much change should he get?</p>		