




Name: _____

January 16th	5-a-day	Numeracy																								
442 + 1480																										
6 x -4	-7 x -4																									
<table border="1"><tbody><tr><td>Portadown</td><td>0745</td><td>0911</td><td>0915</td></tr><tr><td>Lurgan</td><td>0751</td><td> </td><td>0921</td></tr><tr><td>Moir</td><td>0758</td><td> </td><td>0928</td></tr><tr><td>Lisburn</td><td>0808</td><td> </td><td>0938</td></tr><tr><td>Great Victoria Street</td><td>0829</td><td> </td><td>0959</td></tr><tr><td>Belfast Central </td><td>0840</td><td>0945</td><td>1010</td></tr></tbody></table>	Portadown	0745	0911	0915	Lurgan	0751		0921	Moir	0758		0928	Lisburn	0808		0938	Great Victoria Street	0829		0959	Belfast Central 	0840	0945	1010	Lorna lives in Lurgan. She needs to get to Belfast Central by 10am. What time should she get the train?	
Portadown	0745	0911	0915																							
Lurgan	0751		0921																							
Moir	0758		0928																							
Lisburn	0808		0938																							
Great Victoria Street	0829		0959																							
Belfast Central 	0840	0945	1010																							
Work out the mean: 5 9 3 5																										
Draw two lines that are parallel	Draw two lines that are perpendicular																									