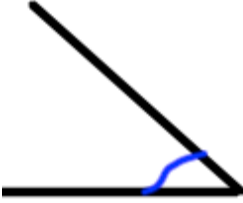
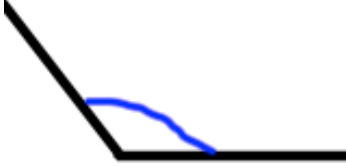
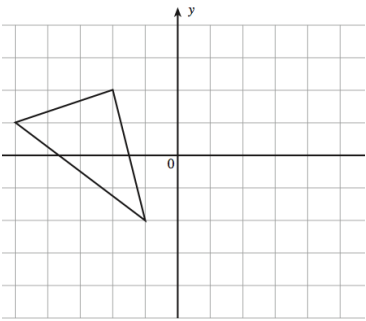


Name: \_\_\_\_\_

January 18th	5-a-day	Numeracy
<p>Fred has 13 twenty pence pieces.</p> <p>What is the total value of these coins?</p>	<p>Mary has 200 fifty pence pieces.</p> <p>What is the total value of these coins?</p>	
 <p>What type of angle is above?</p>	 <p>What type of angle is shown above?</p>	
<p>Sketch a rectangle with area <math>30\text{cm}^2</math></p>		
<p>Work out <math>750 \div 100</math></p>		
	<p>Reflect the triangle in the y-axis.</p>	