

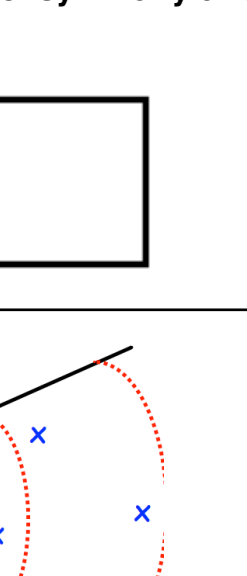




Name: _____

January 2nd	5-a-day	Numeracy
<p>Draw all the lines of symmetry on the square below</p> 	<p>Draw all the lines of symmetry on the rectangle below</p> 	
	<p>At a sports day, 6 students threw a javelin.</p> <p>How many throws were between 10m and 15m?</p>	
 <p>Look at the four digit cards above.</p> <p>You can only use each card once.</p>	<p>Create the smallest possible odd number.</p> 	
<p>Add together 129 and 225.</p>		
<p>Multiply 29 by 5</p>		