
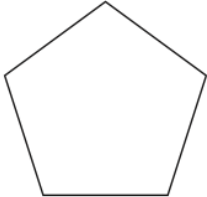
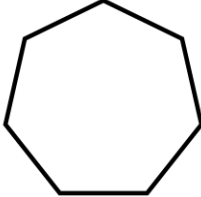
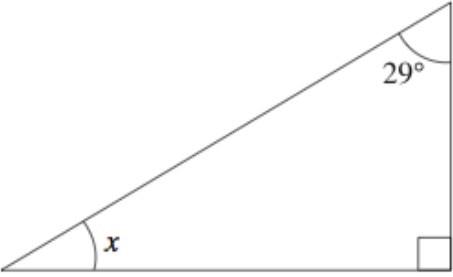


Name: \_\_\_\_\_

January 21st	5-a-day	Numeracy
		What fraction of the shape is shaded? Give your answer in its simplest form.
 Name this shape: _____	 Name this shape: _____	
<p><math>\text{COST} = \text{NUMBER OF DAYS} \times \text{£}40 + \text{£}50</math></p> <p>The formula above shows the cost of hiring a caravan.</p> <p>Work out the cost for 5 days.</p>		
<p><math>\frac{6}{12}</math>    <math>\frac{2}{8}</math>    <math>\frac{7}{21}</math>    <math>\frac{12}{20}</math></p> <p>Circle any fraction equal a <b>third</b>.</p>		
		Find the value of x