
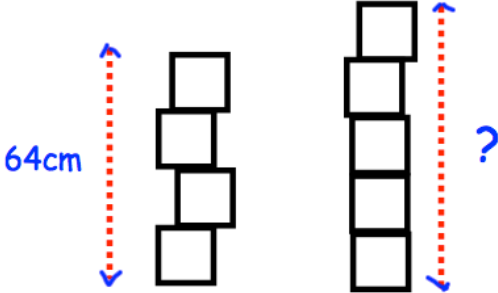
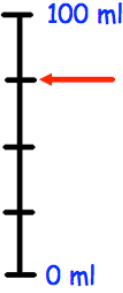


Name: _____

January 9th	5-a-day	Numeracy
 <p>An ice cream cost 72p</p> <p>David pays with a £1 coin</p>		<p>List the coins he may receive in his change?</p>
<p>5 2 1 4</p> <p>0.5 1 0.2 0.25</p>		<p>Match up the numbers that multiply to give an answer of 1</p>
		
		<p>What measurement is shown on the scale?</p>
<p>Mary has 7 blue socks and 3 red socks.</p> <p>If she selects one sock at random, what is the probability she selects a red sock?</p>	