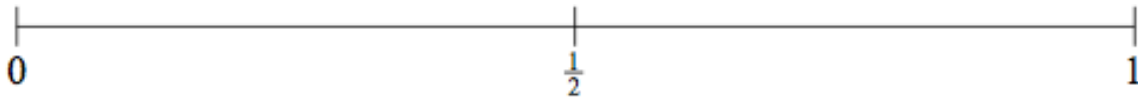


Name: _____

March 19th

5-a-day

Numeracy



Mark on the probability scale, the following probabilities.

(i) A baby being a girl. Use the letter G.

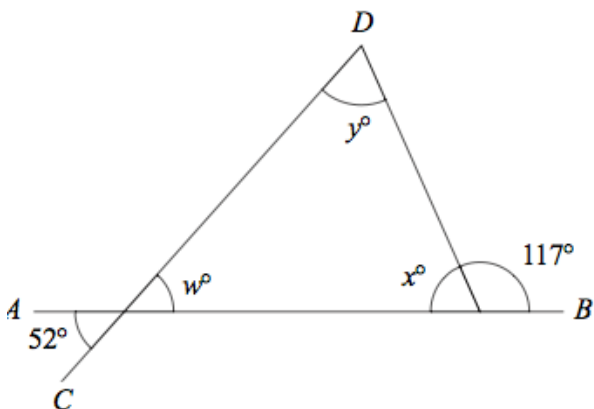

(ii) Rolling a normal 6 sided dice and getting a 7. Use the letter D

There are 30 chocolates in a box.
10 are white chocolates.

What fraction are white chocolates?

What fraction are not white chocolates?

Draw all the lines of symmetry on the diagram



Find the angle x

Find the angle w

Find the angle y