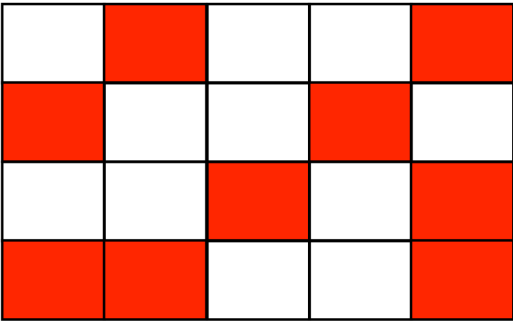

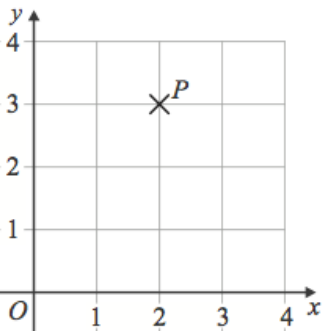



Name: _____

March 25th	5-a-day	Numeracy
		What fraction of this shape is shaded?
 <p>Tim puts seven 20p pieces into the piggy bank. His mum puts three of the same coin into the piggy bank.</p>		The total value of the ten coins is £2.90. What coins did his mum put into the piggy bank?
		Write down the coordinates of P. Plot (3,2) on the grid.
Work out $\frac{1}{6}$ of the 300		Work out $\frac{3}{10}$ of the 300
		This is a biased coin. The probability of a head is $\frac{3}{4}$. It is flipped 60 times. How many heads do you expect?