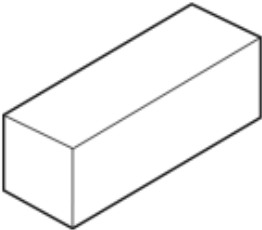
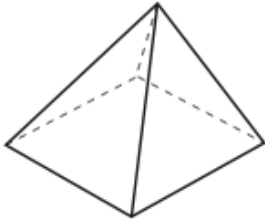




Name: _____

April 26th	5-a-day	Numeracy
 <p>Name this shape _____</p>	 <p>Name this shape _____</p>	
 <p>Name this shape _____</p>	 <p>Name this shape (full name) _____</p>	
<p>Write two thousand three hundred and six in figures</p>	<p>Write 3948 to the nearest 100.</p>	
<p>8 3 8 2 3 9 8</p> <p>a) Mode</p>	<p>b) Median</p> <p>c) Range</p>	
<p>There are 6 pens in a packet.</p> <p>Natalie has 17 packets of pens.</p> <p>How many pens does she have?</p>		