

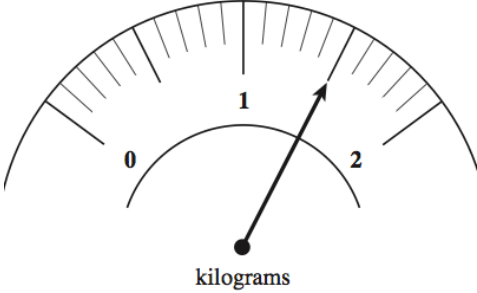


Name: _____

August 27th	5-a-day	Numeracy
 <p>Name _____</p>	 <p>Name _____</p>	
 <p>kilograms</p>	<p>How much flour is on the scale? Give your answer in kilograms.</p> <p>Give your answer in grams.</p>	
<p>There are 135 pupils in Year 9 at a school</p> <p>$\frac{2}{5}$ of these students are blonde.</p>	<p>How many students are blonde?</p>	
<p>Write 34.8 correct to the nearest whole number.</p>	<p>Write 6.3 correct to the nearest whole number.</p>	
<p>The mean of four numbers is 6.</p> <p>Three of the numbers are 1, 3 and 8.</p> <p>Work out the fourth number.</p>		