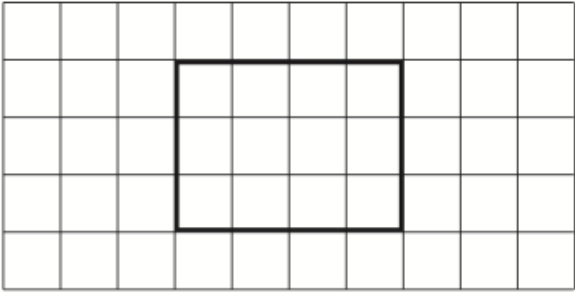
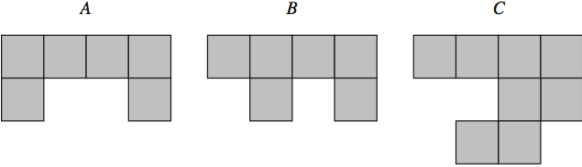
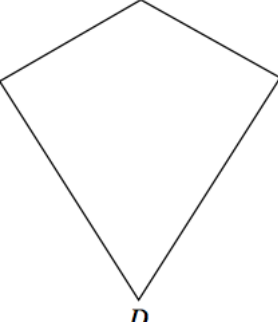


Name: _____

July 14th	5-a-day	Numeracy
	<p>The rectangle is drawn on a centimetre grid.</p> <p>What is its perimeter?</p>	
<p>Convert 4 metres into centimetres</p>	<p>Convert 8 kilometres into metres</p>	
	<p>Which of these shapes have the same area?</p>	
	<p>Draw any lines of symmetry onto the kite.</p>	
<p>There are 130 students in Year 11.</p> <p>The number of pupils in Year 11 is one-sixth of the total number of pupils in the school.</p>	<p>Work out the total number of pupils in the school.</p>	