
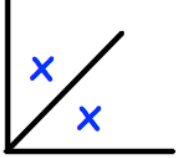
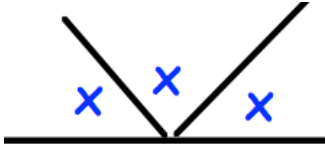


Name: \_\_\_\_\_

July 21st	5-a-day	Numeracy
<p>A new car costs £13,650</p> <p>Write this number in words</p>		
		<p>How many lines of symmetry does the Austrian flag have?</p>
<p>Hannah earns £400 a week</p> <p>She is given a 20% pay rise.</p> <p>What is her new wage?</p>		
 <p>Both angles marked x are equal.</p> <p>Find the size of x.</p>		
 <p>All three angles marked x are equal.</p> <p>Find the size of x</p>		