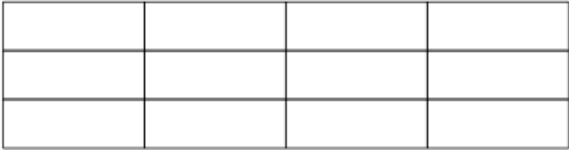
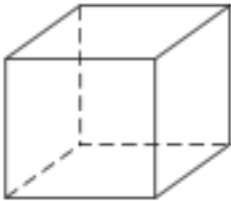
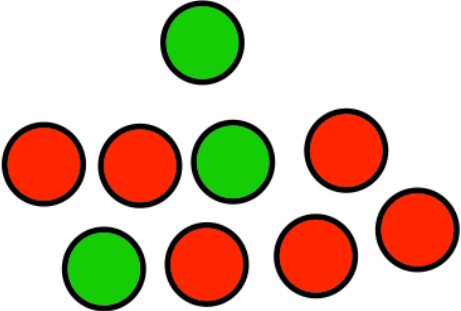


Name: _____

July 23rd	5-a-day	Numeracy
<p>A rule for a sequence is "half the previous number." 40 20 10 ___ ___ Find the two missing numbers</p>		
 <p>Shade $\frac{1}{4}$ of this shape</p>	<p>What percentage of the shape is not shaded?</p>	
 <p>Shown above is a cube</p>	<p>How many faces does the cube have? How many vertices does the cube have?</p>	
	<p>A counter is picked at random. What is the probability of a red?</p>	
<p>$\frac{3}{4}$ of 44m</p>		