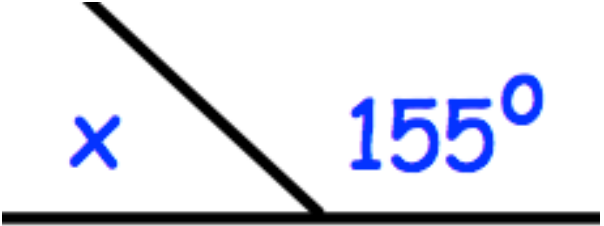

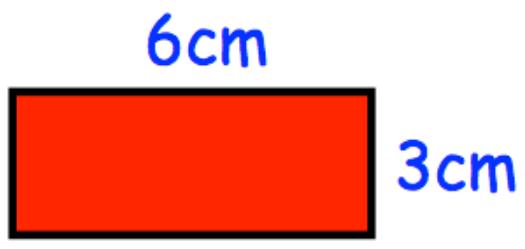


Name: \_\_\_\_\_

| July 26th   | 5-a-day  | Numeracy |
|---|--|----------|
|    |  |          |
| <p>Draw two parallel lines</p>  | <p>Draw two perpendicular lines</p>  |          |
|   | <p>In 5 games, a footballer scores:<br/>1 2 1 3 4</p> <p>What is the median?</p> <p>What is the range?</p> |          |
| <p>Given</p> $37 \times 102 = 3774$ <p>Work out <math>38 \times 102</math></p>      |  |          |
|  | <p>Calculate the area</p>  |          |